




KUKKALASKUT

Mitä lukuja kukat vastaavat?



1.

$$\text{Flower 1} \times \text{Flower 2} \times \text{Flower 3} = 8$$

$$\text{Flower 1} + \text{Flower 4} = 7$$

$$\text{Flower 4} \times \text{Flower 5} = 30$$

$$\text{Flower 5} + \text{Flower 4} = ??$$

2.

$$\text{Pink flower} + \text{Pink flower} = 20$$

$$\text{Blue flower} + \text{Blue flower} + \text{Blue flower} + \text{Blue flower} = 28$$

$$\text{Orange flower} + \text{Orange flower} = 4$$

$$\text{Pink flower} + \text{Blue flower} \times \text{Orange flower} = ?$$

3.

$$\text{Purple Flower} + \text{Purple Flower} + \text{Purple Flower} = 18$$

$$\text{Purple Flower} + \text{Sunflower} + \text{Sunflower} = 22$$

$$\text{Sunflower} \times \text{Purple Flower} - \text{Blossom} = 38$$

$$\text{Sunflower} \times \text{Blossom} - \text{Purple Flower} = ??$$

4.



×




×




=

1



×




+




=

10



×




=


15



+



×



=

??

5.

$$\text{Blue Flower} + \text{Blue Flower} + \text{Blue Flower} = 18$$

$$\text{Orange Flower} + \text{Orange Flower} + \text{Orange Flower} = 9$$

$$\text{Purple Flower} \times \text{Purple Flower} - \text{Purple Flower} = 12$$


$$\text{Orange Flower} \times \text{Purple Flower} \div \text{Blue Flower} = ?$$

6.

$$\text{Red Flower} + \text{Red Flower} = 14$$


$$\text{Yellow Flower} + \text{Green Flower} = 18$$

$$\text{Red Flower} - \text{Yellow Flower} = 1$$




=

?



=

?



=

?

7.

$$\text{Blue Flower} + \text{Pink Flower} = 13$$

$$\text{Blue Flower} \times \text{Pink Flower} = 42$$

$$\text{Pink Flower} - \text{Blue Flower} = 1$$

$$\text{Blue Flower} = ? \quad \text{Pink Flower} = ?$$

8.

$$\text{Green Flower} + \text{Green Flower} + \text{Green Flower} = 15$$

$$\text{Green Flower} + \text{Pink Flower} + \text{Pink Flower} = 23$$

$$\text{Pink Flower} \times \text{Green Flower} - \text{Blue Flower} = 35$$

$$\text{Pink Flower} \times \text{Blue Flower} \div \text{Green Flower} = ??$$

9.

$$\text{Flower 1} + \text{Flower 2} = 6$$

$$\text{Flower 3} - \text{Flower 4} = 3$$

$$\text{Flower 5} + \text{Flower 6} + \text{Flower 7} = 5$$

$$\text{Flower 1} \times \text{Flower 3} \times \text{Flower 5} = ??$$

10.

$$\begin{array}{c} \text{Red pot with fern} \\ + \\ \text{Red pot with fern} \\ + \\ \text{Blue pot with leaves} \\ = 21 \end{array}$$

$$\begin{array}{c} \text{Blue pot with leaves} \\ + \\ \text{Blue pot with leaves} \\ + \\ \text{Red pot with fern} \\ = 15 \end{array}$$

$$\begin{array}{c} \text{Red pot with fern} \\ \times \\ \text{Blue pot with leaves} \\ = ?? \end{array}$$

Vastaukset

1.	11
2.	24
3.	74
4.	16
5.	2
6.	6, 7, 12
7.	6, 7
8.	18
9.	48
10.	27
